

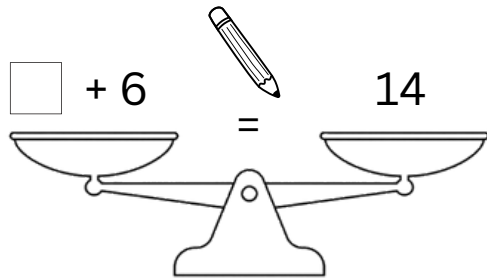
Name: _____

Date: _____

Solve & Balance! Missing Number Word Problems

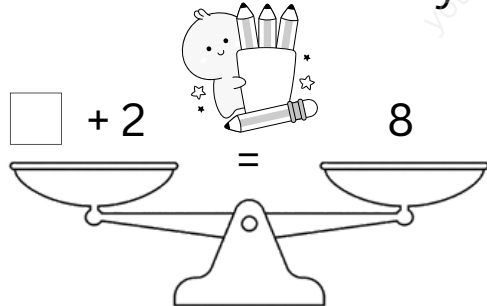
Find the missing number and make both sides equal.

1. Noah had some pencils. He found 6 more and now has 14 pencils. How many pencils did he have at first?



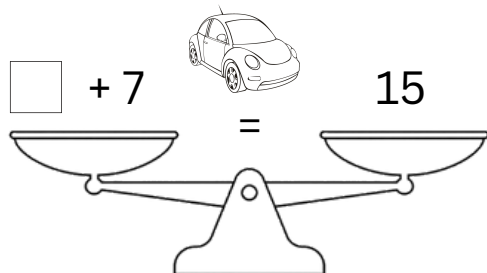
Show your work

2. Mia had some stickers. She got 2 more and now has 8 stickers. How many stickers did she have at first?



Show your work

3. Ethan had some toy cars. He bought 7 more and now has 15 cars. How many cars did he have at first?



Show your work