

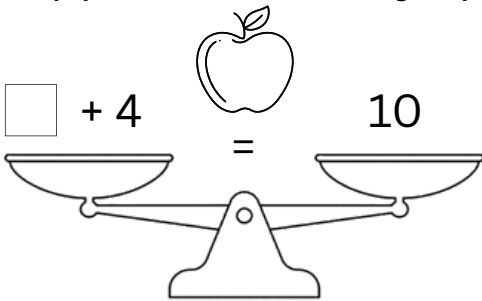
Name: _____

Date: _____

Solve & Balance! Missing Number Word Problems

Find the missing number and make both sides equal.

1. Emma had some apples. She bought 4 more and now has 10 apples. How many apples did she have at first?

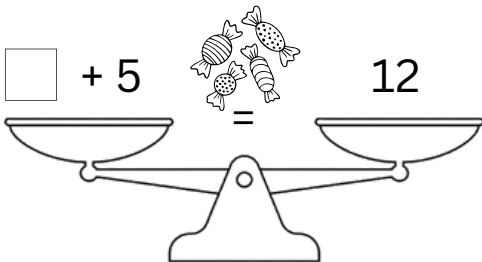


Show your work

$$10 - 4 = 6$$

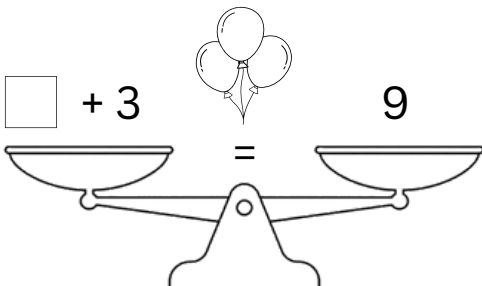
So Emma had 6 apples
at first

2. Liam had some candies. He got 5 more from a friend and now has 12 candies. How many candies did he have at first?



Show your work

3. Ava had some balloons. She bought 3 more and now has 9 balloons. How many balloons did she have at first?



Show your work