

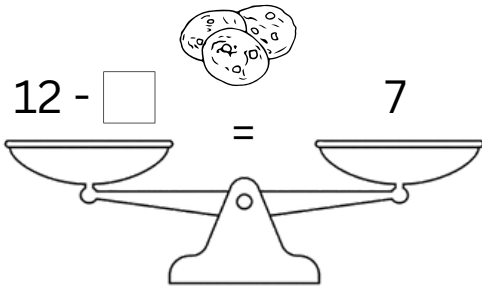
Name: _____

Date: _____

Solve & Balance! Missing Number Word Problems

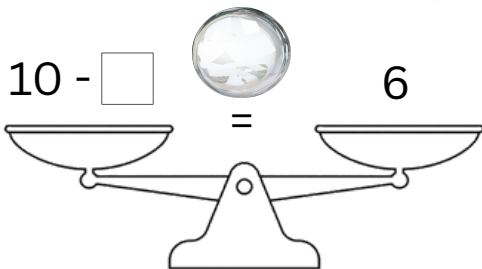
Find the missing number and make both sides equal.

1. Olivia had 12 cookies. She gave some to her friend and now has 7 cookies left. How many cookies did she give away?



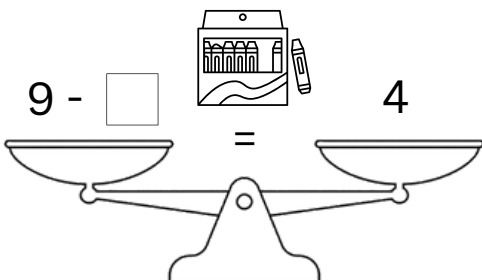
Show your work

2. Lucas had 10 marbles. He lost some and now has 6 marbles. How many marbles did he lose?



Show your work

3. Sophia had 9 crayons. She gave some to her brother and now has 4 crayons left. How many crayons did she give away?



Show your work