


Name: \_\_\_\_\_


Date: \_\_\_\_\_

## Subtraction within 10(Picture Based)


Cross off extra flowers to help solve the equation




$$7-2= \underline{5}$$




$$5-3= \underline{\quad}$$




$$6-4= \underline{\quad}$$




$$5-2= \underline{\quad}$$




$$8-2= \underline{\quad}$$




$$4-3= \underline{\quad}$$




$$5-1= \underline{\quad}$$




$$9-0= \underline{\quad}$$




$$5-5= \underline{\quad}$$



$$6-1= \underline{\quad}$$



$$8-0= \underline{\quad}$$



$$5-3= \underline{\quad}$$