



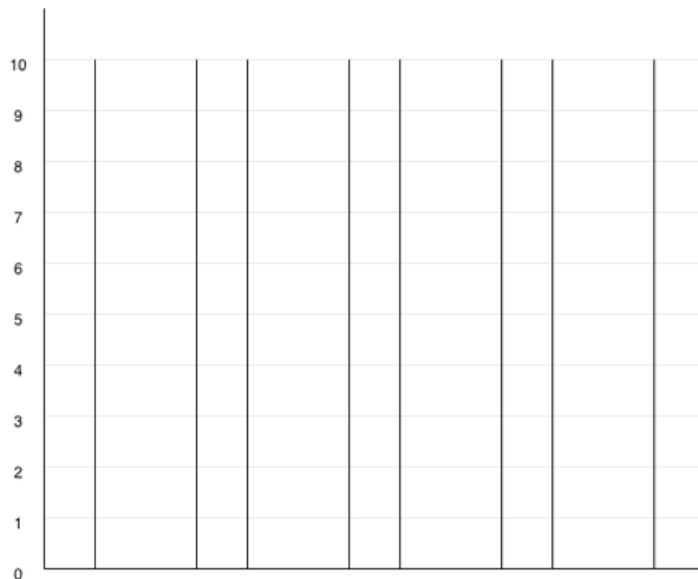





Bar graph -1

Read the table , colour the bars and answer following questions.


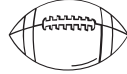


			
7	3	5	10

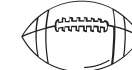
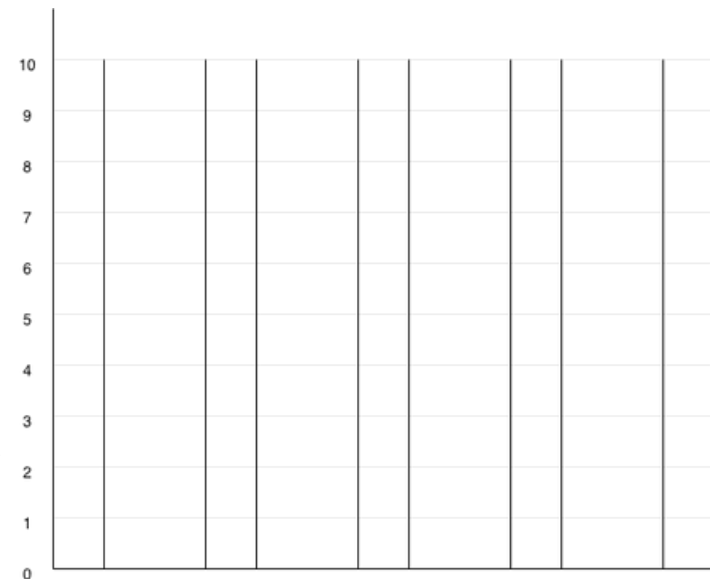




- How many  are there? _____
- Which item has the greatest number? _____
- How many more erasers than pencils are there? _____
- How many items are  +  altogether? _____
- True or False: There are 10 books. _____

Bar graph -2

Read the table , colour the bars and answer following questions.

			
6	9	4	9



- How many baseballs are there? _____
- Which two items have the same number? _____
- How many more  than  are there? _____
- How many balls are there in total? _____
- True or False: Volleyball has 4 balls. _____