


Name: _____

Score: _____

Date: _____


Pictographs

Number of Burgers Katty prepared




1 How many candies did Katty prepared on


a. Tuesday?

_____ 

b. Wednesday?

_____ 

c. Thursday?

_____ 

2 How many more burgers did Katty prepared on

a. Tuesday than Friday?

_____ more

b. Monday than Wednesday?

_____ more

c. Wednesday than Thursday?


_____ more

3 On which day did Katty prepared

a. 1 fewer burger than Tuesday?

b. 3 fewer burgers than Tuesday?

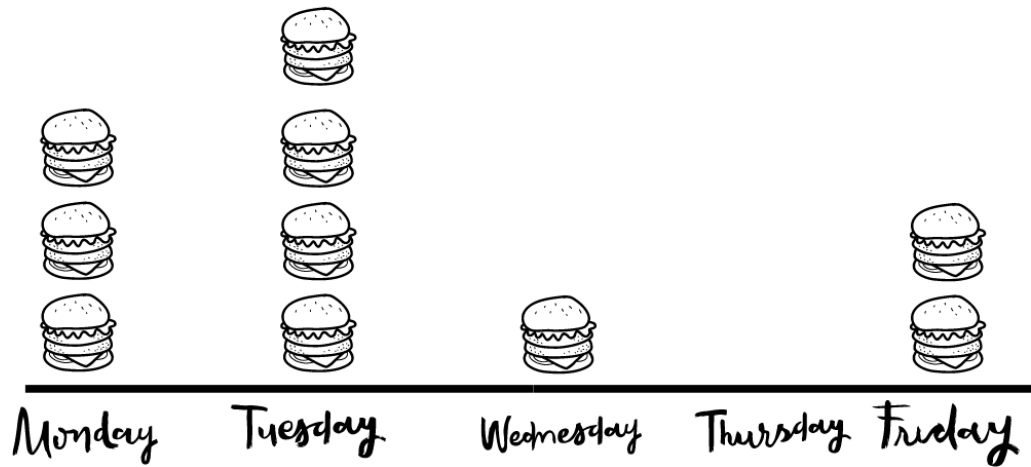
4 How many burgers did she prepare in all?

_____ 

Answers


Pictographs

Number of Burgers Katty prepared




① How many candies did Katty prepared on


a. Tuesday?

__4__ 

b. Wednesday?

__1__ 

c. Thursday?

__0__ 

② How many more burgers did Katty prepared on

a. Tuesday than Friday?

__2__ more

b. Monday than Wednesday?

__2__ more

c. Wednesday than Thursday?

__1__ more

③ On which day did Katty prepared

a. 1 fewer burger than Tuesday?

__Monday__

b. 3 fewer burgers than Tuesday?

__Wednesday__

④ How many burgers did she prepare in all?

__10__ 