

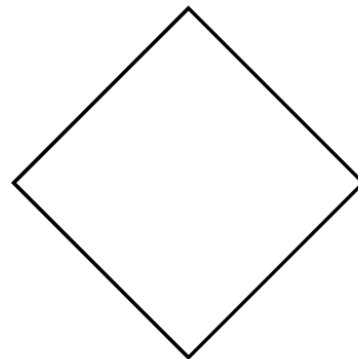

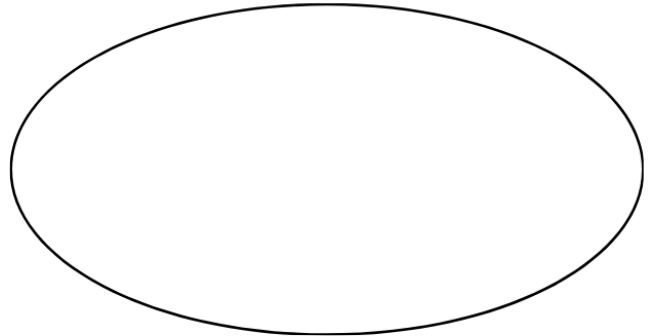

Name: \_\_\_\_\_

Score: \_\_\_\_\_

Date: \_\_\_\_\_

# Fractions

Divide the shape into 4 equal parts



Name: \_\_\_\_\_

Score: \_\_\_\_\_

Date: \_\_\_\_\_

# Fractions

Divide the shape into 4 equal parts

