

Name: \_\_\_\_\_

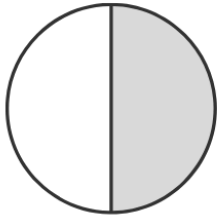
Score: \_\_\_\_\_

Date: \_\_\_\_\_

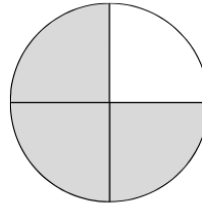
# Fractions

What Fraction of each shape is colored?

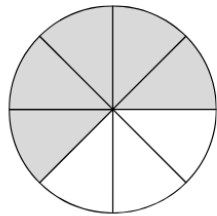
Circle the correct answer



$\frac{1}{1}$   $\frac{1}{2}$   $\frac{3}{4}$   $\frac{2}{3}$



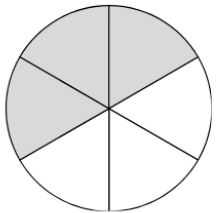
$\frac{1}{1}$   $\frac{1}{2}$   $\frac{3}{4}$   $\frac{2}{3}$



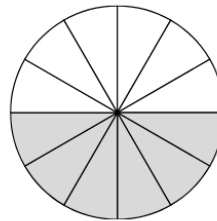
$\frac{5}{8}$   $\frac{1}{2}$   $\frac{3}{4}$   $\frac{2}{3}$



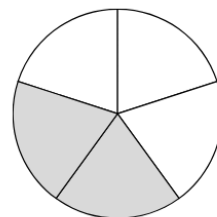
$\frac{1}{1}$   $\frac{1}{2}$   $\frac{3}{4}$   $\frac{2}{3}$



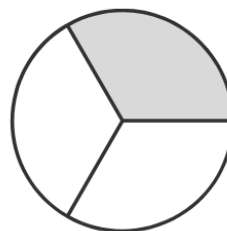
$\frac{3}{4}$   $\frac{3}{6}$   $\frac{3}{4}$   $\frac{2}{3}$



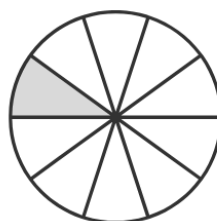
$\frac{6}{12}$   $\frac{1}{3}$   $\frac{3}{4}$   $\frac{2}{3}$



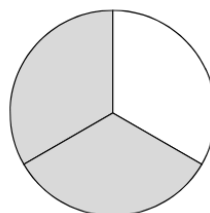
$\frac{2}{3}$   $\frac{1}{2}$   $\frac{2}{5}$   $\frac{2}{4}$



$\frac{2}{3}$   $\frac{1}{3}$   $\frac{3}{4}$   $\frac{3}{3}$



$\frac{1}{10}$   $\frac{1}{9}$   $\frac{2}{9}$   $\frac{2}{10}$

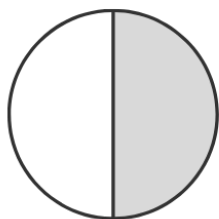


$\frac{2}{3}$   $\frac{1}{2}$   $\frac{2}{5}$   $\frac{2}{4}$

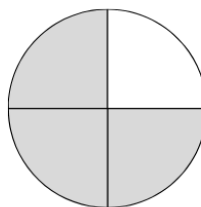
# Answers

What Fraction of each shape is colored?

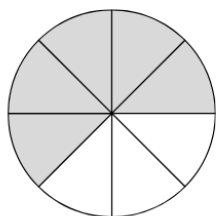
Circle the correct answer



$$\frac{1}{1} \quad \frac{1}{2} \quad \frac{3}{4} \quad \frac{2}{3}$$



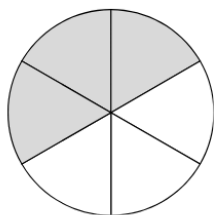
$$\frac{1}{1} \quad \frac{1}{2} \quad \frac{3}{4} \quad \frac{2}{3}$$



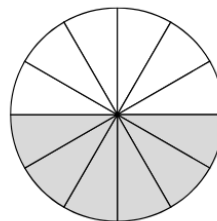
$$\frac{5}{8} \quad \frac{1}{2} \quad \frac{3}{4} \quad \frac{2}{3}$$



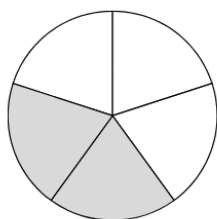
$$\frac{1}{1} \quad \frac{1}{2} \quad \frac{3}{4} \quad \frac{2}{3}$$



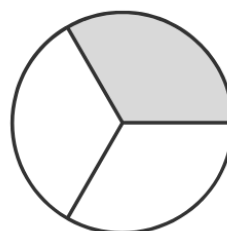
$$\frac{3}{4} \quad \frac{3}{6} \quad \frac{3}{4} \quad \frac{2}{3}$$



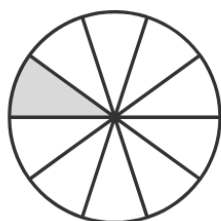
$$\frac{6}{12} \quad \frac{1}{3} \quad \frac{3}{4} \quad \frac{2}{3}$$



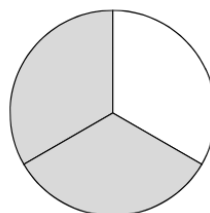
$$\frac{2}{3} \quad \frac{1}{2} \quad \frac{2}{5} \quad \frac{2}{4}$$



$$\frac{2}{3} \quad \frac{1}{3} \quad \frac{3}{4} \quad \frac{3}{3}$$



$$\frac{1}{10} \quad \frac{1}{9} \quad \frac{2}{9} \quad \frac{2}{10}$$



$$\frac{2}{3} \quad \frac{1}{2} \quad \frac{2}{5} \quad \frac{2}{4}$$