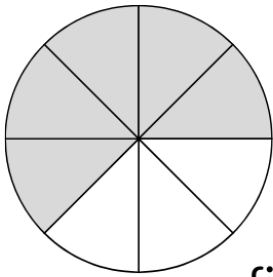


Name: \_\_\_\_\_

Date: \_\_\_\_\_

# Writing **FRACTIONS**

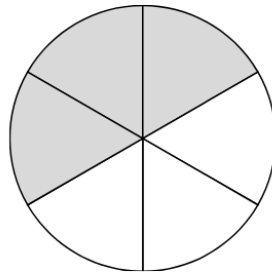
Fill in the blanks for the following fractions:



\_\_\_\_\_

five

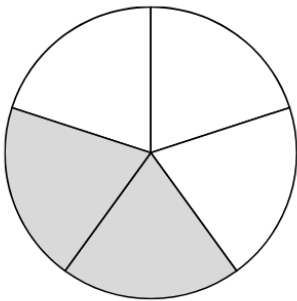
\_\_\_\_\_



\_\_\_\_\_

6

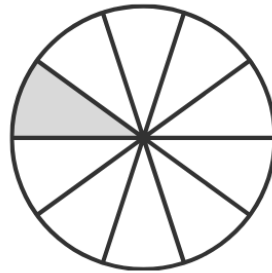
\_\_\_\_\_



\_\_\_\_\_

2

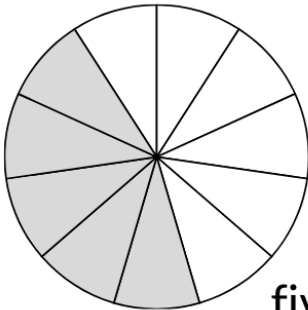
\_\_\_\_\_



\_\_\_\_\_

one

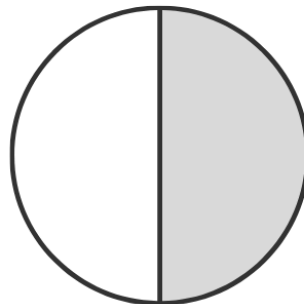
\_\_\_\_\_



\_\_\_\_\_

five

\_\_\_\_\_



\_\_\_\_\_

1

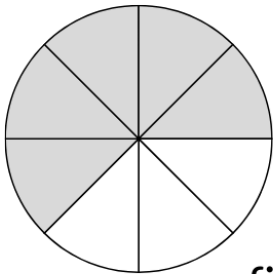
\_\_\_\_\_

Name:

Date:

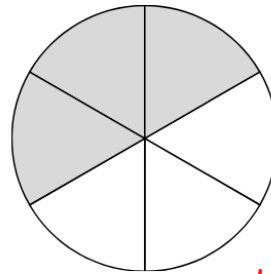
Writing **FRACTIONS**

ANSWERS



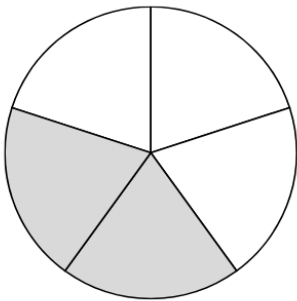
$$\frac{5}{8}$$

five eighths



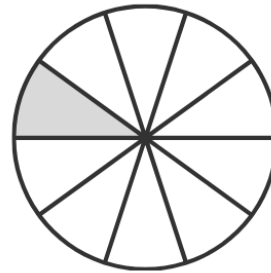
$$\frac{3}{6}$$

three sixths



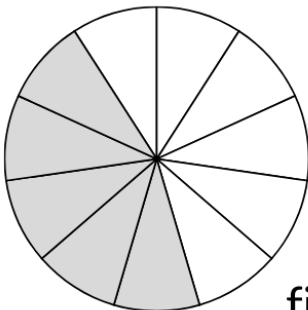
$$\frac{2}{5}$$

two fifths



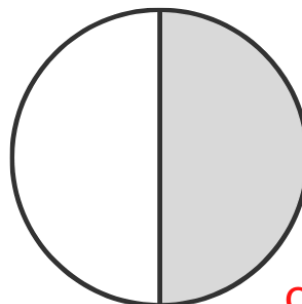
$$\frac{1}{10}$$

one tenths



$$\frac{5}{11}$$

five eleventh



$$\frac{1}{2}$$

one half